



YEAR 3

Easy Going
MATHEMATICS

Work Book

The complete National Curriculum



Work Book
For
Year 3

HOME WORK

M.Nat

Practice Makes Perfect

Success at your fingertips

Acknowledgements

First and foremost I would like to thank God who has given me the guidance and knowledge to make this series of book. My heartfelt thanks goes to my family for their tremendous support and encouragement throughout the making of this book.

I express my gratitude towards Nijeja , Sharugi and Chamu who have provided their valuable time to proof read and design this book . Last but not least I express my gratitude towards my students for their inspiration and progressive feedback which has only led me to improve every maths book of mine..

M.Nat

First Edition 2015

Second edition 2016

Copyright © TGL Publishers, 2015, First Edition

All rights reserved. No part of this publication may be reproduced, transmitted or used in any form or by any means, electronic or mechanical, including photocopying, recording or any information storage or retrieval system, without the prior written permission of the publisher.

Published by TGL Publishers, 101A Blyth Road, Hayes, UB3 1DB

www.leconline.co.uk

M.Nat BSc, BEd, P.G.C.E Diploma in computer programming, Diploma in supervisory Management

MATHEMATICS

YEAR 3

HOMEWORK

M. NAT

Contents

Homework	1	3
Homework	2	4
Homework	3	5
Homework	4	6
Homework	5	7
Homework	6	8
Homework	7	9
Homework	8	10
Homework	9	11
Homework	10	12
Homework	11	13
Homework	12	14
Homework	13	15
Homework	14	16
Homework	15	17
Homework	16	18
Homework	17	19
Homework	18	20
Homework	19	21
Homework	20	22
Homework	21	23
Homework	22	24
Homework	23	25
Homework	24	26
Homework	25	27
Homework	26	28
Homework	27	29
Homework	28	30
Homework	29	31
Homework	30	32

Write these numbers in figures.

- | | | | |
|------------------|----------------------|-------------------|----------------------|
| 1) seventy one | <input type="text"/> | 21) ninety four | <input type="text"/> |
| 2) thirty four | <input type="text"/> | 22) seventy seven | <input type="text"/> |
| 3) thirty two | <input type="text"/> | 23) forty eight | <input type="text"/> |
| 4) thirty one | <input type="text"/> | 24) fifty four | <input type="text"/> |
| 5) thirty nine | <input type="text"/> | 25) sixty nine | <input type="text"/> |
| 6) ninety one | <input type="text"/> | 26) seventy two | <input type="text"/> |
| 7) forty seven | <input type="text"/> | 27) seventy nine | <input type="text"/> |
| 8) fifty seven | <input type="text"/> | 28) eighty five | <input type="text"/> |
| 9) fifty two | <input type="text"/> | 29) ninety eight | <input type="text"/> |
| 10) fifty six | <input type="text"/> | 30) twenty four | <input type="text"/> |
| 11) twenty one | <input type="text"/> | 31) thirty eight | <input type="text"/> |
| 12) thirty three | <input type="text"/> | 32) forty six | <input type="text"/> |
| 13) forty seven | <input type="text"/> | 33) fifty five | <input type="text"/> |
| 14) fifty one | <input type="text"/> | 34) sixty six | <input type="text"/> |
| 15) twenty seven | <input type="text"/> | 35) seventy eight | <input type="text"/> |
| 16) twenty eight | <input type="text"/> | 36) eighty one | <input type="text"/> |
| 17) thirty five | <input type="text"/> | 37) thirty nine | <input type="text"/> |
| 18) sixty one | <input type="text"/> | 38) forty one | <input type="text"/> |
| 19) sixty four | <input type="text"/> | 39) fifty four | <input type="text"/> |
| 20) ninety two | <input type="text"/> | 40) sixty seven | <input type="text"/> |

Write these numbers in words.

1) 28 =

2) 59 =

3) 52 =

4) 74 =

5) 25 =

6) 57 =

7) 63 =

8) 58 =

9) 84 =

10) 87 =

11) 75 =

12) 56 =

13) 49 =

14) 44 =

15) 80 =

16) 81 =

17) 99 =

18) 82 =

19) 72 =

20) 62 =

Write these numbers in figures.

- | | | | |
|-------------------------------|----------------------|-------------------------------|----------------------|
| 1) Two hundred and forty | <input type="text"/> | 21) Seven hundred and forty | <input type="text"/> |
| 2) Five hundred and five | <input type="text"/> | 22) Nine hundred and fifty | <input type="text"/> |
| 3) Seven hundred and one | <input type="text"/> | 23) Two hundred and thirty | <input type="text"/> |
| 4) Seven hundred and seven | <input type="text"/> | 24) Three hundred and seventy | <input type="text"/> |
| 5) Nine hundred and twenty | <input type="text"/> | 25) Seven hundred and sixty | <input type="text"/> |
| 6) Two hundred and sixteen | <input type="text"/> | 26) Four hundred and ninety | <input type="text"/> |
| 7) Three hundred and seven | <input type="text"/> | 27) One hundred and ninety | <input type="text"/> |
| 8) Four hundred and seven | <input type="text"/> | 28) Eight hundred and fifty | <input type="text"/> |
| 9) Three hundred and twenty | <input type="text"/> | 29) Seven hundred and forty | <input type="text"/> |
| 10) Six hundred and seventy | <input type="text"/> | 30) Eight hundred and ninety | <input type="text"/> |
| 11) Nine hundred and sixty | <input type="text"/> | 31) Six hundred and ninety | <input type="text"/> |
| 12) Two hundred and four | <input type="text"/> | 32) Six hundred and eighty | <input type="text"/> |
| 13) Three hundred and forty | <input type="text"/> | 33) Six hundred and twenty | <input type="text"/> |
| 14) Four hundred and sixty | <input type="text"/> | 34) Eight hundred and twenty | <input type="text"/> |
| 15) Nine hundred and seventy | <input type="text"/> | 35) Eight hundred and sixty | <input type="text"/> |
| 16) One hundred and forty | <input type="text"/> | 36) Two hundred and fifty | <input type="text"/> |
| 17) One hundred and fifty | <input type="text"/> | 37) Three hundred and sixty | <input type="text"/> |
| 18) Two hundred and fifty two | <input type="text"/> | 38) Five hundred and thirty | <input type="text"/> |
| 19) Nine hundred and ninety | <input type="text"/> | 39) Seven hundred and eight | <input type="text"/> |
| 20) One hundred and fifty | <input type="text"/> | 40) Nine hundred and six | <input type="text"/> |

Write these numbers in word.

1) 230

2) 304

3) 406

4) 340

5) 626

6) 522

7) 723

8) 735

9) 998

10) 889

11) 107

12) 398

13) 687

14) 589

15) 708

16) 909

17) 401

18) 321

19) 671

20) 385

Ordering two digit numbers

Homework 5

Write these numbers in order, starting with the largest

1) 33, 36, 30, 46, 39, 28, 44, 45	=								
2) 64, 13, 22, 48, 42, 55, 75, 76	=								
3) 86, 74, 38, 68, 45, 34, 23, 12	=								
4) 48, 45, 87, 2, 74, 12, 1, 10	=								
5) 92, 76, 10, 26, 87, 18, 7, 17	=								
6) 77, 42, 56, 32, 10, 66, 65, 79	=								
7) 72, 73, 24, 21, 34, 65, 35, 36	=								
8) 93, 25, 64, 77, 45, 85, 94, 87	=								
9) 56, 44, 3, 20, 31, 45, 13, 67	=								
10) 96, 29, 93, 55, 65, 67, 76, 86	=								
11) 43, 34, 71, 45, 76, 78, 65, 66	=								
12) 50, 56, 43, 23, 88, 61, 62, 60	=								
13) 19, 13, 42, 56, 11, 43, 95, 92	=								
14) 90, 25, 32, 65, 42, 74, 54, 89	=								
15) 55, 33, 87, 46, 49, 24, 56, 27	=								
16) 44, 36, 23, 21, 9, 5, 43, 42	=								
17) 6, 76, 63, 87, 24, 3, 9, 45	=								
18) 31, 3, 6, 25, 57, 68, 28, 45	=								
19) 79, 63, 20, 67, 5, 66, 44, 96	=								
20) 9, 35, 0, 67, 75, 6, 94, 96	=								

Write these numbers in order, starting with the lowest

1) 323, 113, 120, 116, 139, 118,	=						
2) 244, 438, 682, 223, 825, 735,	=						
3) 366, 344, 578, 768, 845, 434,	=						
4) 928, 745, 487, 720, 534, 112	=						
5) 512, 276, 400, 526, 907, 618,	=						
6) 327, 462, 756, 532, 810, 176,	=						
7) 602, 513, 334, 641, 664, 775,	=						
8) 573, 485, 794, 887, 465, 585	=						
9) 267, 647, 537, 307, 338, 359,	=						
10) 179, 478, 298, 894, 455, 855	=						
11) 134, 441, 801, 505, 664, 378,	=						
12) 101, 457, 644, 823, 658, 651,	=						
13) 209, 403, 602, 506, 401, 603,	=						
14) 141, 411, 331, 461, 661, 871,	=						
15) 445, 393, 957, 746, 419, 214,	=						
16) 264, 666, 773, 821, 909, 135,	=						
17) 376, 476, 665, 287, 364, 200,	=						
18) 101, 835, 177, 126, 367, 598,	=						
19) 829, 586, 370, 567, 458, 668,	=						
20) 359, 465, 970, 767, 775, 746,	=						

Write down the values of the following numbers in bold.

- | | | | | | | | |
|-----|------------|---|--------------------------------|-----|------------|---|----------------------------------|
| 1) | 234 | = | <input type="text" value="4"/> | 21) | 304 | = | <input type="text" value="300"/> |
| 2) | 324 | = | <input type="text"/> | 22) | 418 | = | <input type="text"/> |
| 3) | 456 | = | <input type="text"/> | 23) | 421 | = | <input type="text"/> |
| 4) | 345 | = | <input type="text"/> | 24) | 435 | = | <input type="text"/> |
| 5) | 676 | = | <input type="text"/> | 25) | 536 | = | <input type="text"/> |
| 6) | 542 | = | <input type="text"/> | 26) | 657 | = | <input type="text"/> |
| 7) | 123 | = | <input type="text"/> | 27) | 478 | = | <input type="text"/> |
| 8) | 135 | = | <input type="text"/> | 28) | 876 | = | <input type="text"/> |
| 9) | 198 | = | <input type="text"/> | 29) | 765 | = | <input type="text"/> |
| 10) | 189 | = | <input type="text"/> | 30) | 912 | = | <input type="text"/> |
| 11) | 167 | = | <input type="text"/> | 31) | 932 | = | <input type="text"/> |
| 12) | 378 | = | <input type="text"/> | 32) | 924 | = | <input type="text"/> |
| 13) | 657 | = | <input type="text"/> | 33) | 926 | = | <input type="text"/> |
| 14) | 389 | = | <input type="text"/> | 34) | 903 | = | <input type="text"/> |
| 15) | 908 | = | <input type="text"/> | 35) | 961 | = | <input type="text"/> |
| 16) | 509 | = | <input type="text"/> | 36) | 231 | = | <input type="text"/> |
| 17) | 400 | = | <input type="text"/> | 37) | 241 | = | <input type="text"/> |
| 18) | 320 | = | <input type="text"/> | 38) | 253 | = | <input type="text"/> |
| 19) | 678 | = | <input type="text"/> | 39) | 342 | = | <input type="text"/> |
| 20) | 387 | = | <input type="text"/> | 40) | 279 | = | <input type="text"/> |

Round the following numbers to their nearest ten.

1) 28 =

2) 44 =

3) 76 =

4) 39 =

5) 47 =

6) 22 =

7) 95 =

8) 97 =

9) 71 =

10) 77 =

11) 62 =

12) 58 =

13) 37 =

14) 15 =

15) 55 =

16) 65 =

17) 75 =

18) 46 =

19) 94 =

20) 81 =

21) 89 =

22) 78 =

23) 58 =

24) 56 =

25) 42 =

26) 43 =

27) 51 =

28) 38 =

29) 36 =

30) 73 =

31) 82 =

32) 87 =

33) 66 =

34) 24 =

35) 54 =

36) 53 =

37) 99 =

38) 26 =

Round the following numbers to their nearest hundred.

- | | | | |
|-----------|----------------------|-----------|----------------------|
| 1) 348 = | <input type="text"/> | 20) 184 = | <input type="text"/> |
| 2) 454 = | <input type="text"/> | 21) 186 = | <input type="text"/> |
| 3) 416 = | <input type="text"/> | 22) 888 = | <input type="text"/> |
| 4) 549 = | <input type="text"/> | 23) 968 = | <input type="text"/> |
| 5) 547 = | <input type="text"/> | 24) 666 = | <input type="text"/> |
| 6) 698 = | <input type="text"/> | 25) 762 = | <input type="text"/> |
| 7) 725 = | <input type="text"/> | 26) 763 = | <input type="text"/> |
| 8) 893 = | <input type="text"/> | 27) 569 = | <input type="text"/> |
| 9) 891 = | <input type="text"/> | 28) 918 = | <input type="text"/> |
| 10) 227 = | <input type="text"/> | 29) 996 = | <input type="text"/> |
| 11) 412 = | <input type="text"/> | 30) 793 = | <input type="text"/> |
| 12) 678 = | <input type="text"/> | 31) 492 = | <input type="text"/> |
| 13) 777 = | <input type="text"/> | 32) 297 = | <input type="text"/> |
| 14) 368 = | <input type="text"/> | 33) 126 = | <input type="text"/> |
| 15) 569 = | <input type="text"/> | 34) 734 = | <input type="text"/> |
| 16) 665 = | <input type="text"/> | 35) 844 = | <input type="text"/> |
| 17) 275 = | <input type="text"/> | 36) 443 = | <input type="text"/> |
| 18) 376 = | <input type="text"/> | 37) 449 = | <input type="text"/> |
| 19) 779 = | <input type="text"/> | 38) 752 = | <input type="text"/> |

First estimate then add them.

- | | | | | | | | |
|-----|----|---|----|---|---|---|----------------------|
| 1) | 22 | + | 32 | = | + | = | <input type="text"/> |
| 2) | 37 | + | 48 | = | + | = | <input type="text"/> |
| 3) | 21 | + | 61 | = | + | = | <input type="text"/> |
| 4) | 94 | + | 85 | = | + | = | <input type="text"/> |
| 5) | 88 | + | 78 | = | + | = | <input type="text"/> |
| 6) | 44 | + | 48 | = | + | = | <input type="text"/> |
| 7) | 17 | + | 87 | = | + | = | <input type="text"/> |
| 8) | 37 | + | 62 | = | + | = | <input type="text"/> |
| 9) | 68 | + | 52 | = | + | = | <input type="text"/> |
| 10) | 76 | + | 88 | = | + | = | <input type="text"/> |
| 11) | 99 | + | 91 | = | + | = | <input type="text"/> |
| 12) | 43 | + | 87 | = | + | = | <input type="text"/> |
| 13) | 73 | + | 67 | = | + | = | <input type="text"/> |
| 14) | 87 | + | 57 | = | + | = | <input type="text"/> |
| 15) | 68 | + | 75 | = | + | = | <input type="text"/> |
| 16) | 69 | + | 68 | = | + | = | <input type="text"/> |
| 17) | 99 | + | 79 | = | + | = | <input type="text"/> |
| 18) | 18 | + | 36 | = | + | = | <input type="text"/> |
| 19) | 19 | + | 48 | = | + | = | <input type="text"/> |
| 20) | 58 | + | 48 | = | + | = | <input type="text"/> |
| 21) | 69 | + | 89 | = | + | = | <input type="text"/> |
| 22) | 97 | + | 39 | = | + | = | <input type="text"/> |
| 23) | 74 | + | 29 | = | + | = | <input type="text"/> |
| 24) | 67 | + | 79 | = | + | = | <input type="text"/> |

Estimating and Adding (Three digit numbers—nearest 100)

- 1) 118 + 218 = + =
- 2) 234 + 364 = + =
- 3) 414 + 468 = + =
- 4) 745 + 655 = + =
- 5) 838 + 948 = + =
- 6) 754 + 868 = + =
- 7) 127 + 177 = + =
- 8) 217 + 532 = + =
- 9) 148 + 182 = + =
- 10) 979 + 589 = + =
- 11) 991 + 998 = + =
- 12) 823 + 837 = + =
- 13) 733 + 697 = + =
- 14) 827 + 567 = + =
- 15) 648 + 865 = + =
- 16) 649 + 158 = + =
- 17) 359 + 969 = + =
- 18) 978 + 776 = + =
- 19) 889 + 498 = + =
- 20) 148 + 128 = + =
- 21) 209 + 409 = + =
- 22) 107 + 109 = + =
- 23) 114 + 209 = + =
- 24) 307 + 269 = + =

Addition — Two digits

$$\begin{array}{r} 1) \ 26 \\ + \ 23 \\ \hline \end{array}$$

$$\begin{array}{r} 2) \ 42 \\ + \ 26 \\ \hline \end{array}$$

$$\begin{array}{r} 3) \ 39 \\ + \ 29 \\ \hline \end{array}$$

$$\begin{array}{r} 4) \ 48 \\ + \ 28 \\ \hline \end{array}$$

$$\begin{array}{r} 5) \ 57 \\ + \ 27 \\ \hline \end{array}$$

$$\begin{array}{r} 6) \ 15 \\ + \ 27 \\ \hline \end{array}$$

$$\begin{array}{r} 7) \ 25 \\ + \ 29 \\ \hline \end{array}$$

$$\begin{array}{r} 8) \ 39 \\ + \ 26 \\ \hline \end{array}$$

$$\begin{array}{r} 9) \ 48 \\ + \ 29 \\ \hline \end{array}$$

$$\begin{array}{r} 10) \ 56 \\ + \ 27 \\ \hline \end{array}$$

$$\begin{array}{r} 11) \ 18 \\ + \ 29 \\ \hline \end{array}$$

$$\begin{array}{r} 12) \ 18 \\ + \ 63 \\ \hline \end{array}$$

$$\begin{array}{r} 13) \ 19 \\ + \ 43 \\ \hline \end{array}$$

$$\begin{array}{r} 14) \ 11 \\ + \ 44 \\ \hline \end{array}$$

$$\begin{array}{r} 15) \ 14 \\ + \ 28 \\ \hline \end{array}$$

$$\begin{array}{r} 16) \ 29 \\ + \ 26 \\ \hline \end{array}$$

$$\begin{array}{r} 17) \ 38 \\ + \ 22 \\ \hline \end{array}$$

$$\begin{array}{r} 18) \ 29 \\ + \ 28 \\ \hline \end{array}$$

$$\begin{array}{r} 19) \ 39 \\ + \ 38 \\ \hline \end{array}$$

$$\begin{array}{r} 20) \ 29 \\ + \ 33 \\ \hline \end{array}$$

$$\begin{array}{r} 21) \ 31 \\ + \ 24 \\ \hline \end{array}$$

$$\begin{array}{r} 22) \ 38 \\ + \ 64 \\ \hline \end{array}$$

$$\begin{array}{r} 23) \ 39 \\ + \ 53 \\ \hline \end{array}$$

$$\begin{array}{r} 24) \ 39 \\ + \ 43 \\ \hline \end{array}$$

$$\begin{array}{r} 25) \ 39 \\ + \ 29 \\ \hline \end{array}$$

$$\begin{array}{r} 26) \ 49 \\ + \ 27 \\ \hline \end{array}$$

$$\begin{array}{r} 27) \ 58 \\ + \ 28 \\ \hline \end{array}$$

$$\begin{array}{r} 28) \ 47 \\ + \ 29 \\ \hline \end{array}$$

$$\begin{array}{r} 29) \ 40 \\ + \ 28 \\ \hline \end{array}$$

$$\begin{array}{r} 30) \ 40 \\ + \ 33 \\ \hline \end{array}$$

$$\begin{array}{r} 31) \ 50 \\ + \ 23 \\ \hline \end{array}$$

$$\begin{array}{r} 32) \ 58 \\ + \ 64 \\ \hline \end{array}$$

$$\begin{array}{r} 33) \ 54 \\ + \ 53 \\ \hline \end{array}$$

$$\begin{array}{r} 34) \ 54 \\ + \ 43 \\ \hline \end{array}$$

$$\begin{array}{r} 35) \ 64 \\ + \ 30 \\ \hline \end{array}$$

$$\begin{array}{r} 36) \ 64 \\ + \ 27 \\ \hline \end{array}$$

$$\begin{array}{r} 37) \ 64 \\ + \ 28 \\ \hline \end{array}$$

$$\begin{array}{r} 38) \ 64 \\ + \ 29 \\ \hline \end{array}$$

$$\begin{array}{r} 39) \ 61 \\ + \ 28 \\ \hline \end{array}$$

$$\begin{array}{r} 40) \ 71 \\ + \ 33 \\ \hline \end{array}$$

$$\begin{array}{r} 41) \ 71 \\ + \ 27 \\ \hline \end{array}$$

$$\begin{array}{r} 42) \ 79 \\ + \ 28 \\ \hline \end{array}$$

$$\begin{array}{r} 43) \ 89 \\ + \ 29 \\ \hline \end{array}$$

$$\begin{array}{r} 44) \ 82 \\ + \ 28 \\ \hline \end{array}$$

$$\begin{array}{r} 45) \ 82 \\ + \ 33 \\ \hline \end{array}$$

Addition — Three digits

$$\begin{array}{r} 1) \ 126 \\ + \ 122 \\ \hline \end{array}$$

$$\begin{array}{r} 2) \ 232 \\ + \ 323 \\ \hline \end{array}$$

$$\begin{array}{r} 3) \ 242 \\ + \ 423 \\ \hline \end{array}$$

$$\begin{array}{r} 4) \ 332 \\ + \ 223 \\ \hline \end{array}$$

$$\begin{array}{r} 5) \ 244 \\ + \ 523 \\ \hline \end{array}$$

$$\begin{array}{r} 6) \ 338 \\ + \ 523 \\ \hline \end{array}$$

$$\begin{array}{r} 7) \ 354 \\ + \ 723 \\ \hline \end{array}$$

$$\begin{array}{r} 8) \ 168 \\ + \ 124 \\ \hline \end{array}$$

$$\begin{array}{r} 9) \ 152 \\ + \ 125 \\ \hline \end{array}$$

$$\begin{array}{r} 10) \ 265 \\ + \ 223 \\ \hline \end{array}$$

$$\begin{array}{r} 11) \ 327 \\ + \ 323 \\ \hline \end{array}$$

$$\begin{array}{r} 12) \ 438 \\ + \ 463 \\ \hline \end{array}$$

$$\begin{array}{r} 13) \ 549 \\ + \ 543 \\ \hline \end{array}$$

$$\begin{array}{r} 14) \ 651 \\ + \ 644 \\ \hline \end{array}$$

$$\begin{array}{r} 15) \ 764 \\ + \ 728 \\ \hline \end{array}$$

$$\begin{array}{r} 16) \ 919 \\ + \ 826 \\ \hline \end{array}$$

$$\begin{array}{r} 17) \ 828 \\ + \ 922 \\ \hline \end{array}$$

$$\begin{array}{r} 18) \ 239 \\ + \ 128 \\ \hline \end{array}$$

$$\begin{array}{r} 19) \ 349 \\ + \ 228 \\ \hline \end{array}$$

$$\begin{array}{r} 20) \ 459 \\ + \ 333 \\ \hline \end{array}$$

$$\begin{array}{r} 21) \ 521 \\ + \ 424 \\ \hline \end{array}$$

$$\begin{array}{r} 22) \ 618 \\ + \ 564 \\ \hline \end{array}$$

$$\begin{array}{r} 23) \ 719 \\ + \ 653 \\ \hline \end{array}$$

$$\begin{array}{r} 24) \ 849 \\ + \ 743 \\ \hline \end{array}$$

$$\begin{array}{r} 25) \ 959 \\ + \ 829 \\ \hline \end{array}$$

$$\begin{array}{r} 26) \ 339 \\ + \ 927 \\ \hline \end{array}$$

$$\begin{array}{r} 27) \ 948 \\ + \ 128 \\ \hline \end{array}$$

$$\begin{array}{r} 28) \ 327 \\ + \ 229 \\ \hline \end{array}$$

$$\begin{array}{r} 29) \ 503 \\ + \ 328 \\ \hline \end{array}$$

$$\begin{array}{r} 30) \ 546 \\ + \ 433 \\ \hline \end{array}$$

$$\begin{array}{r} 31) \ 620 \\ + \ 523 \\ \hline \end{array}$$

$$\begin{array}{r} 32) \ 728 \\ + \ 664 \\ \hline \end{array}$$

$$\begin{array}{r} 33) \ 834 \\ + \ 753 \\ \hline \end{array}$$

$$\begin{array}{r} 34) \ 944 \\ + \ 843 \\ \hline \end{array}$$

$$\begin{array}{r} 35) \ 854 \\ + \ 929 \\ \hline \end{array}$$

$$\begin{array}{r} 36) \ 234 \\ + \ 127 \\ \hline \end{array}$$

$$\begin{array}{r} 37) \ 344 \\ + \ 228 \\ \hline \end{array}$$

$$\begin{array}{r} 38) \ 434 \\ + \ 329 \\ \hline \end{array}$$

$$\begin{array}{r} 39) \ 551 \\ + \ 428 \\ \hline \end{array}$$

$$\begin{array}{r} 40) \ 661 \\ + \ 533 \\ \hline \end{array}$$

$$\begin{array}{r} 41) \ 741 \\ + \ 627 \\ \hline \end{array}$$

$$\begin{array}{r} 42) \ 849 \\ + \ 728 \\ \hline \end{array}$$

$$\begin{array}{r} 43) \ 939 \\ + \ 829 \\ \hline \end{array}$$

$$\begin{array}{r} 44) \ 752 \\ + \ 928 \\ \hline \end{array}$$

$$\begin{array}{r} 45) \ 362 \\ + \ 133 \\ \hline \end{array}$$

Subtraction — Two digits

$$\begin{array}{r} 1) \ 63 \\ - \ 21 \\ \hline \end{array}$$

$$\begin{array}{r} 2) \ 75 \\ - \ 51 \\ \hline \end{array}$$

$$\begin{array}{r} 3) \ 82 \\ - \ 41 \\ \hline \end{array}$$

$$\begin{array}{r} 4) \ 94 \\ - \ 61 \\ \hline \end{array}$$

$$\begin{array}{r} 5) \ 97 \\ - \ 82 \\ \hline \end{array}$$

$$\begin{array}{r} 6) \ 35 \\ - \ 22 \\ \hline \end{array}$$

$$\begin{array}{r} 7) \ 67 \\ - \ 42 \\ \hline \end{array}$$

$$\begin{array}{r} 8) \ 88 \\ - \ 12 \\ \hline \end{array}$$

$$\begin{array}{r} 9) \ 79 \\ - \ 53 \\ \hline \end{array}$$

$$\begin{array}{r} 10) \ 83 \\ - \ 72 \\ \hline \end{array}$$

$$\begin{array}{r} 11) \ 57 \\ - \ 43 \\ \hline \end{array}$$

$$\begin{array}{r} 12) \ 63 \\ - \ 54 \\ \hline \end{array}$$

$$\begin{array}{r} 13) \ 74 \\ - \ 63 \\ \hline \end{array}$$

$$\begin{array}{r} 14) \ 95 \\ - \ 84 \\ \hline \end{array}$$

$$\begin{array}{r} 15) \ 66 \\ - \ 55 \\ \hline \end{array}$$

$$\begin{array}{r} 16) \ 97 \\ - \ 55 \\ \hline \end{array}$$

$$\begin{array}{r} 17) \ 88 \\ - \ 69 \\ \hline \end{array}$$

$$\begin{array}{r} 18) \ 99 \\ - \ 79 \\ \hline \end{array}$$

$$\begin{array}{r} 19) \ 74 \\ - \ 48 \\ \hline \end{array}$$

$$\begin{array}{r} 20) \ 92 \\ - \ 76 \\ \hline \end{array}$$

$$\begin{array}{r} 21) \ 89 \\ - \ 46 \\ \hline \end{array}$$

$$\begin{array}{r} 22) \ 79 \\ - \ 68 \\ \hline \end{array}$$

$$\begin{array}{r} 23) \ 75 \\ - \ 69 \\ \hline \end{array}$$

$$\begin{array}{r} 24) \ 86 \\ - \ 69 \\ \hline \end{array}$$

$$\begin{array}{r} 25) \ 77 \\ - \ 49 \\ \hline \end{array}$$

$$\begin{array}{r} 26) \ 68 \\ - \ 47 \\ \hline \end{array}$$

$$\begin{array}{r} 27) \ 99 \\ - \ 68 \\ \hline \end{array}$$

$$\begin{array}{r} 28) \ 48 \\ - \ 27 \\ \hline \end{array}$$

$$\begin{array}{r} 29) \ 37 \\ - \ 29 \\ \hline \end{array}$$

$$\begin{array}{r} 30) \ 47 \\ - \ 39 \\ \hline \end{array}$$

$$\begin{array}{r} 31) \ 75 \\ - \ 67 \\ \hline \end{array}$$

$$\begin{array}{r} 32) \ 76 \\ - \ 39 \\ \hline \end{array}$$

$$\begin{array}{r} 33) \ 85 \\ - \ 47 \\ \hline \end{array}$$

$$\begin{array}{r} 34) \ 78 \\ - \ 48 \\ \hline \end{array}$$

$$\begin{array}{r} 35) \ 68 \\ - \ 37 \\ \hline \end{array}$$

$$\begin{array}{r} 36) \ 48 \\ - \ 23 \\ \hline \end{array}$$

$$\begin{array}{r} 37) \ 39 \\ - \ 28 \\ \hline \end{array}$$

$$\begin{array}{r} 38) \ 28 \\ - \ 19 \\ \hline \end{array}$$

$$\begin{array}{r} 39) \ 77 \\ - \ 59 \\ \hline \end{array}$$

$$\begin{array}{r} 40) \ 58 \\ - \ 49 \\ \hline \end{array}$$

$$\begin{array}{r} 41) \ 37 \\ - \ 29 \\ \hline \end{array}$$

$$\begin{array}{r} 42) \ 49 \\ - \ 31 \\ \hline \end{array}$$

$$\begin{array}{r} 43) \ 76 \\ - \ 59 \\ \hline \end{array}$$

$$\begin{array}{r} 44) \ 69 \\ - \ 31 \\ \hline \end{array}$$

$$\begin{array}{r} 45) \ 56 \\ - \ 49 \\ \hline \end{array}$$

Subtraction - Three digits

$$\begin{array}{r} 1) \ 163 \\ - \ 101 \\ \hline \end{array}$$

$$\begin{array}{r} 2) \ 475 \\ - \ 302 \\ \hline \end{array}$$

$$\begin{array}{r} 3) \ 582 \\ - \ 243 \\ \hline \end{array}$$

$$\begin{array}{r} 4) \ 294 \\ - \ 165 \\ \hline \end{array}$$

$$\begin{array}{r} 5) \ 497 \\ - \ 288 \\ \hline \end{array}$$

$$\begin{array}{r} 6) \ 536 \\ - \ 227 \\ \hline \end{array}$$

$$\begin{array}{r} 7) \ 767 \\ - \ 449 \\ \hline \end{array}$$

$$\begin{array}{r} 8) \ 988 \\ - \ 819 \\ \hline \end{array}$$

$$\begin{array}{r} 9) \ 978 \\ - \ 599 \\ \hline \end{array}$$

$$\begin{array}{r} 10) \ 883 \\ - \ 675 \\ \hline \end{array}$$

$$\begin{array}{r} 11) \ 457 \\ - \ 248 \\ \hline \end{array}$$

$$\begin{array}{r} 12) \ 363 \\ - \ 159 \\ \hline \end{array}$$

$$\begin{array}{r} 13) \ 774 \\ - \ 168 \\ \hline \end{array}$$

$$\begin{array}{r} 14) \ 995 \\ - \ 286 \\ \hline \end{array}$$

$$\begin{array}{r} 15) \ 666 \\ - \ 358 \\ \hline \end{array}$$

$$\begin{array}{r} 16) \ 797 \\ - \ 359 \\ \hline \end{array}$$

$$\begin{array}{r} 17) \ 988 \\ - \ 469 \\ \hline \end{array}$$

$$\begin{array}{r} 18) \ 999 \\ - \ 577 \\ \hline \end{array}$$

$$\begin{array}{r} 19) \ 734 \\ - \ 647 \\ \hline \end{array}$$

$$\begin{array}{r} 20) \ 912 \\ - \ 173 \\ \hline \end{array}$$

$$\begin{array}{r} 21) \ 245 \\ - \ 189 \\ \hline \end{array}$$

$$\begin{array}{r} 22) \ 973 \\ - \ 672 \\ \hline \end{array}$$

$$\begin{array}{r} 23) \ 745 \\ - \ 636 \\ \hline \end{array}$$

$$\begin{array}{r} 24) \ 586 \\ - \ 468 \\ \hline \end{array}$$

$$\begin{array}{r} 25) \ 877 \\ - \ 549 \\ \hline \end{array}$$

$$\begin{array}{r} 26) \ 868 \\ - \ 649 \\ \hline \end{array}$$

$$\begin{array}{r} 27) \ 999 \\ - \ 767 \\ \hline \end{array}$$

$$\begin{array}{r} 28) \ 848 \\ - \ 828 \\ \hline \end{array}$$

$$\begin{array}{r} 29) \ 837 \\ - \ 128 \\ \hline \end{array}$$

$$\begin{array}{r} 30) \ 947 \\ - \ 138 \\ \hline \end{array}$$

$$\begin{array}{r} 31) \ 775 \\ - \ 266 \\ \hline \end{array}$$

$$\begin{array}{r} 32) \ 976 \\ - \ 338 \\ \hline \end{array}$$

$$\begin{array}{r} 33) \ 685 \\ - \ 446 \\ \hline \end{array}$$

$$\begin{array}{r} 34) \ 878 \\ - \ 549 \\ \hline \end{array}$$

$$\begin{array}{r} 35) \ 968 \\ - \ 639 \\ \hline \end{array}$$

$$\begin{array}{r} 36) \ 948 \\ - \ 729 \\ \hline \end{array}$$

$$\begin{array}{r} 37) \ 739 \\ - \ 424 \\ \hline \end{array}$$

$$\begin{array}{r} 38) \ 818 \\ - \ 116 \\ \hline \end{array}$$

$$\begin{array}{r} 39) \ 728 \\ - \ 127 \\ \hline \end{array}$$

$$\begin{array}{r} 40) \ 958 \\ - \ 240 \\ \hline \end{array}$$

$$\begin{array}{r} 41) \ 937 \\ - \ 328 \\ \hline \end{array}$$

$$\begin{array}{r} 42) \ 649 \\ - \ 438 \\ \hline \end{array}$$

$$\begin{array}{r} 43) \ 876 \\ - \ 557 \\ \hline \end{array}$$

$$\begin{array}{r} 44) \ 969 \\ - \ 633 \\ \hline \end{array}$$

$$\begin{array}{r} 45) \ 756 \\ - \ 547 \\ \hline \end{array}$$

Multiplication

1)	$\begin{array}{r} 46 \\ \times 2 \\ \hline \end{array}$	2)	$\begin{array}{r} 48 \\ \times 2 \\ \hline \end{array}$	3)	$\begin{array}{r} 50 \\ \times 2 \\ \hline \end{array}$	4)	$\begin{array}{r} 58 \\ \times 2 \\ \hline \end{array}$	5)	$\begin{array}{r} 62 \\ \times 2 \\ \hline \end{array}$
----	---	----	---	----	---	----	---	----	---

6)	$\begin{array}{r} 79 \\ \times 3 \\ \hline \end{array}$	7)	$\begin{array}{r} 69 \\ \times 3 \\ \hline \end{array}$	8)	$\begin{array}{r} 68 \\ \times 3 \\ \hline \end{array}$	9)	$\begin{array}{r} 65 \\ \times 3 \\ \hline \end{array}$	10)	$\begin{array}{r} 66 \\ \times 3 \\ \hline \end{array}$
----	---	----	---	----	---	----	---	-----	---

11)	$\begin{array}{r} 52 \\ \times 3 \\ \hline \end{array}$	12)	$\begin{array}{r} 55 \\ \times 3 \\ \hline \end{array}$	13)	$\begin{array}{r} 85 \\ \times 3 \\ \hline \end{array}$	14)	$\begin{array}{r} 95 \\ \times 3 \\ \hline \end{array}$	15)	$\begin{array}{r} 96 \\ \times 3 \\ \hline \end{array}$
-----	---	-----	---	-----	---	-----	---	-----	---

16)	$\begin{array}{r} 88 \\ \times 4 \\ \hline \end{array}$	17)	$\begin{array}{r} 85 \\ \times 4 \\ \hline \end{array}$	18)	$\begin{array}{r} 86 \\ \times 4 \\ \hline \end{array}$	19)	$\begin{array}{r} 87 \\ \times 4 \\ \hline \end{array}$	20)	$\begin{array}{r} 89 \\ \times 4 \\ \hline \end{array}$
-----	---	-----	---	-----	---	-----	---	-----	---

21)	$\begin{array}{r} 84 \\ \times 4 \\ \hline \end{array}$	22)	$\begin{array}{r} 99 \\ \times 4 \\ \hline \end{array}$	23)	$\begin{array}{r} 98 \\ \times 4 \\ \hline \end{array}$	24)	$\begin{array}{r} 90 \\ \times 4 \\ \hline \end{array}$	25)	$\begin{array}{r} 94 \\ \times 4 \\ \hline \end{array}$
-----	---	-----	---	-----	---	-----	---	-----	---

26)	$\begin{array}{r} 83 \\ \times 5 \\ \hline \end{array}$	27)	$\begin{array}{r} 85 \\ \times 5 \\ \hline \end{array}$	28)	$\begin{array}{r} 84 \\ \times 5 \\ \hline \end{array}$	29)	$\begin{array}{r} 93 \\ \times 5 \\ \hline \end{array}$	30)	$\begin{array}{r} 97 \\ \times 5 \\ \hline \end{array}$
-----	---	-----	---	-----	---	-----	---	-----	---

31)	$\begin{array}{r} 92 \\ \times 6 \\ \hline \end{array}$	32)	$\begin{array}{r} 98 \\ \times 6 \\ \hline \end{array}$	33)	$\begin{array}{r} 94 \\ \times 6 \\ \hline \end{array}$	34)	$\begin{array}{r} 92 \\ \times 6 \\ \hline \end{array}$	35)	$\begin{array}{r} 99 \\ \times 6 \\ \hline \end{array}$
-----	---	-----	---	-----	---	-----	---	-----	---

36)	$\begin{array}{r} 94 \\ \times 6 \\ \hline \end{array}$	37)	$\begin{array}{r} 93 \\ \times 6 \\ \hline \end{array}$	38)	$\begin{array}{r} 83 \\ \times 6 \\ \hline \end{array}$	39)	$\begin{array}{r} 82 \\ \times 6 \\ \hline \end{array}$	40)	$\begin{array}{r} 61 \\ \times 6 \\ \hline \end{array}$
-----	---	-----	---	-----	---	-----	---	-----	---

Division

1) $2 \overline{) 32}$ 2) $2 \overline{) 92}$ 3) $2 \overline{) 52}$ 4) $2 \overline{) 22}$

5) $2 \overline{) 24}$ 6) $2 \overline{) 44}$ 7) $2 \overline{) 84}$ 8) $2 \overline{) 68}$

9) $3 \overline{) 48}$ 10) $3 \overline{) 45}$ 11) $3 \overline{) 51}$ 12) $3 \overline{) 54}$

13) $3 \overline{) 57}$ 14) $3 \overline{) 63}$ 15) $3 \overline{) 93}$ 16) $3 \overline{) 99}$

17) $4 \overline{) 56}$ 18) $4 \overline{) 68}$ 19) $4 \overline{) 76}$ 20) $4 \overline{) 244}$

21) $4 \overline{) 48}$ 22) $4 \overline{) 88}$ 23) $4 \overline{) 40}$ 24) $4 \overline{) 64}$

25) $5 \overline{) 30}$ 26) $5 \overline{) 35}$ 27) $5 \overline{) 85}$ 28) $5 \overline{) 95}$

29) $5 \overline{) 105}$ 30) $5 \overline{) 110}$ 31) $5 \overline{) 170}$ 32) $5 \overline{) 225}$

33) $6 \overline{) 54}$ 34) $6 \overline{) 60}$ 35) $6 \overline{) 120}$ 36) $6 \overline{) 720}$

What are the missing numbers ?

1) $12 = 9 + \square$	2) $13 = 5 + \square$	3) $21 = 17 + \square$
$12 = 8 + \square$	$13 = 4 + \square$	$21 = 14 + \square$
$12 = 7 + \square$	$13 = 3 + \square$	$21 = 13 + \square$
$12 = 6 + \square$	$13 = 2 + \square$	$21 = 11 + \square$


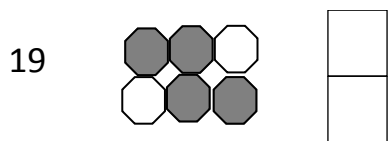
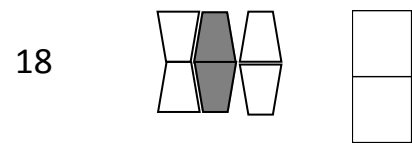
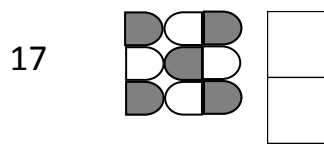
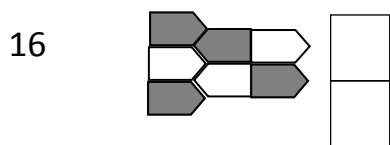
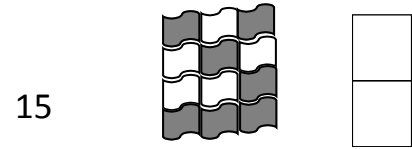
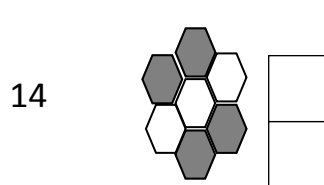

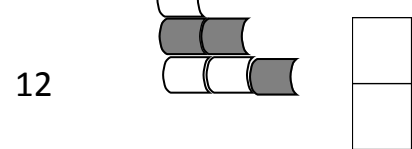
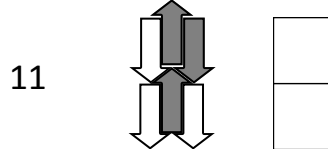
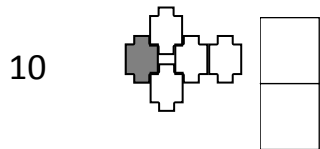
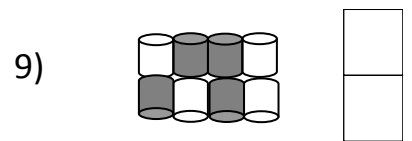
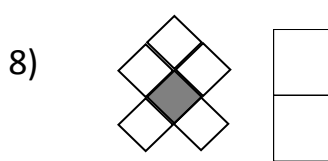
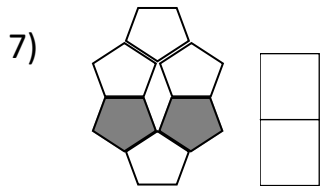
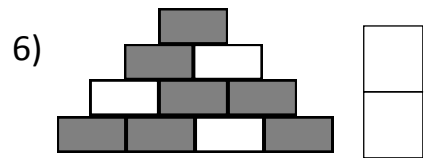
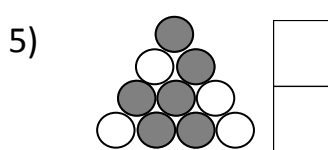
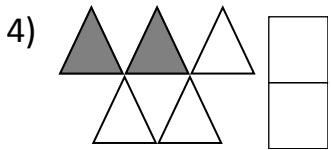
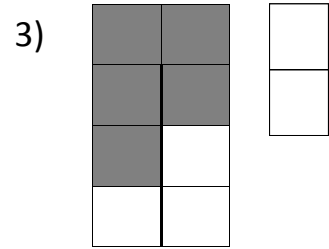
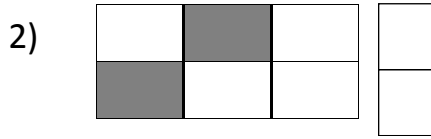
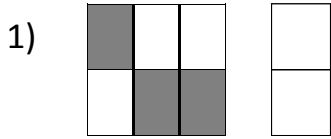
4) $22 = 10 + \square$	5) $23 = 10 + \square$	6) $24 = 10 + \square$
$22 = 11 + \square$	$29 = 10 + \square$	$25 = 10 + \square$
$22 = 12 + \square$	$27 = 10 + \square$	$26 = 10 + \square$
$22 = 13 + \square$	$22 = 10 + \square$	$28 = 10 + \square$

7) $18 = \square + 10$	8) $31 = \square + 10$	9) $24 = \square + 11$
$17 = \square + 10$	$13 = \square + 10$	$25 = \square + 12$
$29 = \square + 10$	$32 = \square + 10$	$26 = \square + 13$
$30 = \square + 10$	$23 = \square + 10$	$27 = \square + 14$

10) $16 = 2 + 8 + \square$	11) $2 = 3 + \square + 6$	12) $1 = 3 + \square + 4$
$18 = 7 + 3 + \square$	$2 = 4 + \square + 7$	$1 = 4 + \square + 7$
$19 = 3 + 7 + \square$	$2 = 8 + \square + 8$	$1 = 8 + \square + 8$
$20 = 9 + 1 + \square$	$1 = 1 + \square + 9$	$1 = 9 + \square + 9$

13) $22 = 12 + 8 + \square$	14) $4 = 3 + 8 + \square$	15) $6 = 4 + 8 + \square$
$25 = 17 + 3 + \square$	$4 = 3 + 3 + \square$	$6 = 4 + 1 + \square$
$33 = 13 + 17 + \square$	$5 = 3 + 1 + \square$	$6 = 4 + 1 + \square$
$43 = 19 + 11 + \square$	$6 = 3 + 1 + \square$	$6 = 4 + 1 + \square$

What is the fraction of the unshaded parts in the shape?



Write the equivalent fraction?

- | | | |
|--|---|--|
| 1) $\frac{2}{5} = \frac{\boxed{40}}{\boxed{100}}$ | 11) $\frac{1}{11} = \frac{\boxed{33}}{\boxed{363}}$ | 21) $\frac{5}{7} = \frac{\boxed{56}}{\boxed{121}}$ |
| 2) $\frac{3}{5} = \frac{\boxed{12}}{\boxed{20}}$ | 12) $\frac{2}{6} = \frac{\boxed{18}}{\boxed{54}}$ | 22) $\frac{2}{12} = \frac{\boxed{20}}{\boxed{120}}$ |
| 3) $\frac{1}{8} = \frac{\boxed{56}}{\boxed{448}}$ | 13) $\frac{3}{6} = \frac{\boxed{21}}{\boxed{42}}$ | 23) $\frac{3}{12} = \frac{\boxed{48}}{\boxed{192}}$ |
| 4) $\frac{3}{8} = \frac{\boxed{64}}{\boxed{216}}$ | 14) $\frac{1}{12} = \frac{\boxed{24}}{\boxed{288}}$ | 24) $\frac{1}{13} = \frac{\boxed{39}}{\boxed{507}}$ |
| 5) $\frac{5}{7} = \frac{\boxed{20}}{\boxed{140}}$ | 15) $\frac{4}{10} = \frac{\boxed{24}}{\boxed{60}}$ | 25) $\frac{4}{12} = \frac{\boxed{32}}{\boxed{96}}$ |
| 6) $\frac{2}{3} = \frac{\boxed{18}}{\boxed{27}}$ | 16) $\frac{5}{10} = \frac{\boxed{30}}{\boxed{60}}$ | 26) $\frac{6}{12} = \frac{\boxed{12}}{\boxed{24}}$ |
| 7) $\frac{1}{5} = \frac{\boxed{9}}{\boxed{45}}$ | 17) $\frac{6}{10} = \frac{\boxed{18}}{\boxed{30}}$ | 27) $\frac{7}{12} = \frac{\boxed{14}}{\boxed{24}}$ |
| 8) $\frac{1}{7} = \frac{\boxed{8}}{\boxed{56}}$ | 18) $\frac{7}{11} = \frac{\boxed{35}}{\boxed{242}}$ | 28) $\frac{8}{13} = \frac{\boxed{32}}{\boxed{208}}$ |
| 9) $\frac{6}{8} = \frac{\boxed{36}}{\boxed{48}}$ | 19) $\frac{3}{11} = \frac{\boxed{27}}{\boxed{99}}$ | 29) $\frac{2}{11} = \frac{\boxed{22}}{\boxed{121}}$ |
| 10) $\frac{3}{8} = \frac{\boxed{96}}{\boxed{320}}$ | 20) $\frac{1}{9} = \frac{\boxed{108}}{\boxed{972}}$ | 30) $\frac{5}{11} = \frac{\boxed{121}}{\boxed{605}}$ |

Write the value ?

1) $\frac{1}{3}$ of 18 =

2) $\frac{1}{4}$ of 24 =

3) $\frac{1}{8}$ of 16 =

4) $\frac{1}{3}$ of 21 =

5) $\frac{1}{4}$ of 36 =

6) $\frac{1}{4}$ of 28 =

7) $\frac{1}{9}$ of 36 =

8) $\frac{1}{5}$ of 50 =

9) $\frac{1}{2}$ of 100 =

10) $\frac{1}{4}$ of 12 =

11) $\frac{1}{10}$ of 20 =

12) $\frac{1}{5}$ of 45 =

13) $\frac{1}{10}$ of 30 =

14) $\frac{1}{6}$ of 42 =

15) $\frac{1}{7}$ of 56 =

16) $\frac{1}{3}$ of 27 =

17) $\frac{1}{4}$ of 40 =

18) $\frac{1}{20}$ of 40 =

19) $\frac{1}{11}$ of 33 =

20) $\frac{1}{11}$ of 22 =

21) $\frac{1}{5}$ of 55 =

22) $\frac{1}{4}$ of 44 =

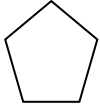
23) $\frac{1}{8}$ of 88 =

24) $\frac{1}{9}$ of 90 =

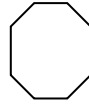
Multiplying by TEN and HUNDRED

- | | |
|-------------------------------------|-------------------------------------|
| 1) 12 × 10 = <input type="text"/> | 2) 29 × 10 = <input type="text"/> |
| 3) 16 × 10 = <input type="text"/> | 4) 93 × 10 = <input type="text"/> |
| 5) 22 × 10 = <input type="text"/> | 6) 77 × 10 = <input type="text"/> |
| 7) 23 × 10 = <input type="text"/> | 8) 78 × 10 = <input type="text"/> |
| 9) 19 × 10 = <input type="text"/> | 10) 76 × 10 = <input type="text"/> |
| 11) 33 × 10 = <input type="text"/> | 12) 73 × 10 = <input type="text"/> |
| 13) 34 × 10 = <input type="text"/> | 14) 72 × 10 = <input type="text"/> |
| 15) 35 × 10 = <input type="text"/> | 16) 21 × 10 = <input type="text"/> |
| 17) 36 × 10 = <input type="text"/> | 18) 22 × 10 = <input type="text"/> |
| 19) 37 × 100 = <input type="text"/> | 20) 91 × 100 = <input type="text"/> |
| 21) 38 × 100 = <input type="text"/> | 22) 99 × 100 = <input type="text"/> |
| 23) 46 × 100 = <input type="text"/> | 24) 92 × 100 = <input type="text"/> |
| 25) 27 × 100 = <input type="text"/> | 26) 88 × 100 = <input type="text"/> |
| 27) 25 × 100 = <input type="text"/> | 28) 84 × 100 = <input type="text"/> |
| 29) 16 × 100 = <input type="text"/> | 30) 83 × 100 = <input type="text"/> |
| 31) 37 × 100 = <input type="text"/> | 32) 42 × 100 = <input type="text"/> |
| 33) 48 × 100 = <input type="text"/> | 34) 39 × 100 = <input type="text"/> |
| 35) 99 × 100 = <input type="text"/> | 36) 16 × 100 = <input type="text"/> |

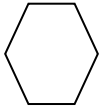
Write the name of the following shapes.



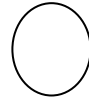
.....



.....



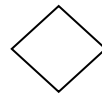
.....



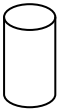
.....



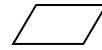
.....



.....



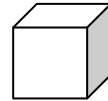
.....




.....



.....



.....



.....




.....



.....



.....



.....



.....



.....



.....

In each question draw and complete a frequency table to summarise the data.

1. The number of sweets in a packet.

22 22 34 22 26 26 26 23 23 22 26 23 34 34 34
 22
 26 34 34 26 22 22 26 34 34 22 26 26 23 23 23
 23

2. Numbers thrown using a dice.

3 4 5 4 3 6 4 6 5 6 5 4 3 4 5
 6
 5 5 6 5 4 3 6 5 6 5 5 4 4 6 5
 5
 4 5 6 6 6 5 6 6 4 3 5 3 6 5 6
 3

3. The ages of the first forty children to leave a school.

14 15 16 17 16 14 15 17 16 16 16 14 16 14 14
 15 16 17 15 16 17 15 14 16 17 16 14 15 14 15
 17 14 15 16 17 17 16 17 14 15

4. The six students(M, N, O, P) late to school in a month.

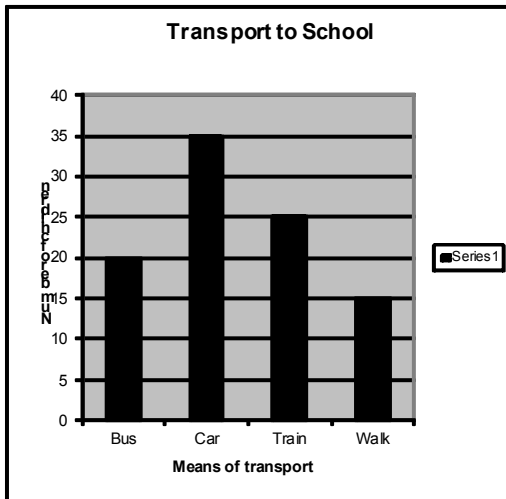
M N O P O P M N P O M M N P O
 P M N O P O P P O Q M O N P O

5. The goals scored by teams in a football league.

3 1 0 0 1 3 2 1 0 2 3 0 0 3 2
 2 1 1 0 3 2 2 3 2 1 0 3 3 3 2

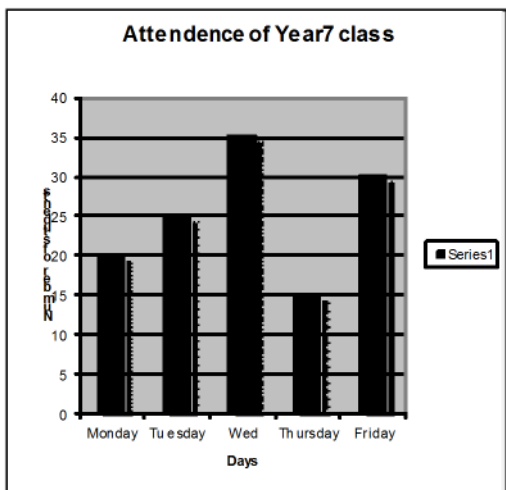
Bar chart

1)



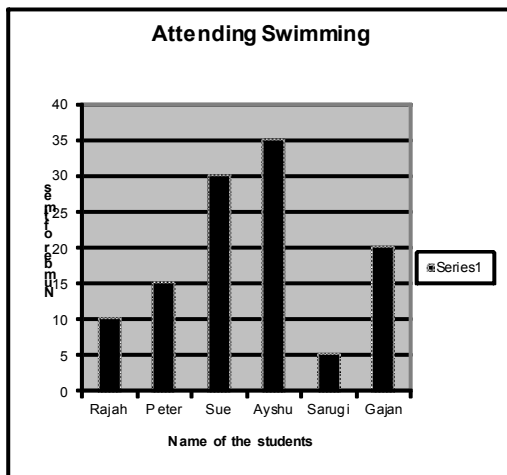
- a) How many people travelled by train?
.....
- b) Find the total number of people travelled by all means of transport
.....
- c) Which mode of transport is used less?
.....

2)



- a) How many pupils attended the school?
.....
- b) On which day, the maximum number of students were present?
.....
- c) How many students were present on Tuesday?
.....

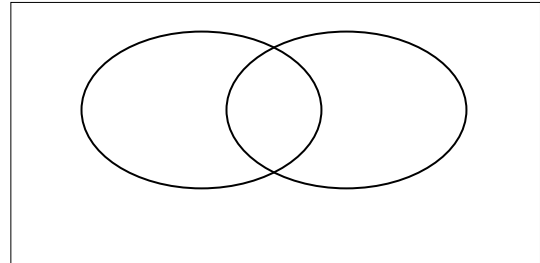
3)



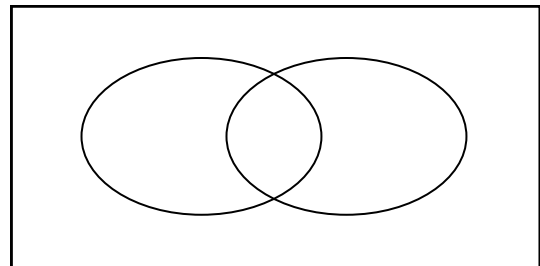
- a) How many visits have they made to the swimming pool ?
.....
- b) Which one has made the maximum number of visits?
.....
- c) Who has visited the least ?
.....

Arrange this data sets into Venn diagram and answer the following questions from the Venn diagrams below.

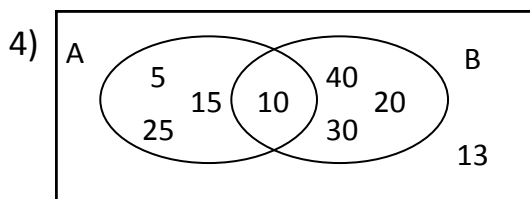
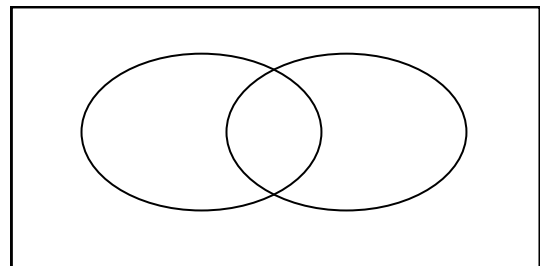
- 1) A : { 3,5,7,9,11,13,15}
 B : {2, 3, 4,5,6}



- 2) A : { dog, sheep, lion, tiger}
 B : { bear, lion, deer, monkey}



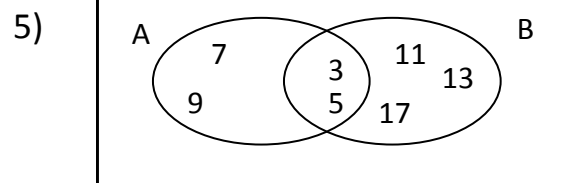
- 3) A : {multiple of 4}
 B : {multiple of 5}



Write the elements of A

Write the elements of B

Write the name of the set contains 10.



The elements of A belongs to which group of numbers

The elements of B belongs to which group of numbers

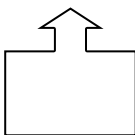
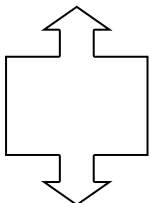
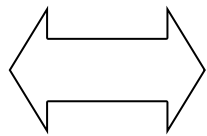
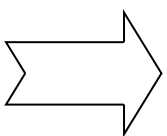

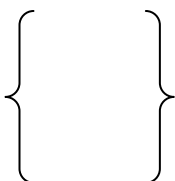
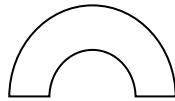

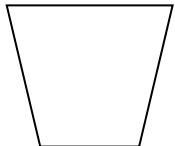
Why is the number 3 and 5 in the middle area?

Unit Conversion

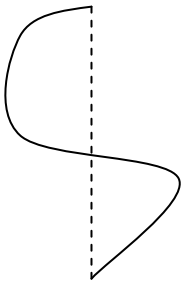
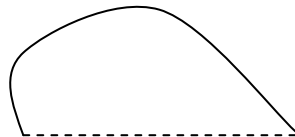
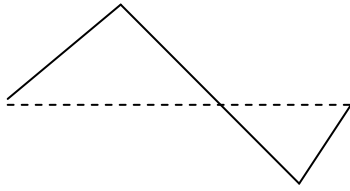
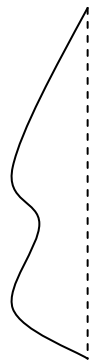
- | | |
|--|-------------------------------------|
| 1) 1300 cm = <input type="text"/> m | 21) 8 m = <input type="text"/> cm |
| 2) 6600 cm = <input type="text"/> m | 22) 13 m = <input type="text"/> cm |
| 3) 2200 cm = <input type="text"/> m | 23) 15 m = <input type="text"/> cm |
| 4) 1700 cm = <input type="text"/> m | 24) 3 m = <input type="text"/> cm |
| 5) 1800 cm = <input type="text"/> m | 25) 12 m = <input type="text"/> cm |
| 6) 34000 m = <input type="text"/> km | 26) 3 km = <input type="text"/> m |
| 7) 72000 m = <input type="text"/> km | 27) 7 km = <input type="text"/> m |
| 8) 95000 m = <input type="text"/> km | 28) 9 km = <input type="text"/> m |
| 9) 15000 m = <input type="text"/> km | 29) 14 km = <input type="text"/> m |
| 10) 100000 m = <input type="text"/> km | 30) 15 km = <input type="text"/> m |
| 11) 88000 g = <input type="text"/> kg | 31) 6 kg = <input type="text"/> g |
| 12) 61000 g = <input type="text"/> kg | 32) 8 kg = <input type="text"/> g |
| 13) 600000 g = <input type="text"/> kg | 33) 12 kg = <input type="text"/> g |
| 14) 104000 g = <input type="text"/> kg | 34) 16 kg = <input type="text"/> g |
| 15) 87000 g = <input type="text"/> kg | 35) 18 kg = <input type="text"/> g |
| 16) 85000 ml = <input type="text"/> l | 36) 7 l = <input type="text"/> ml |
| 17) 77000 ml = <input type="text"/> l | 37) 4 l = <input type="text"/> ml |
| 18) 90000 ml = <input type="text"/> l | 38) 14 l = <input type="text"/> ml |
| 19) 80000 ml = <input type="text"/> l | 39) 11 l = <input type="text"/> ml |
| 20) 600000 ml = <input type="text"/> l | 40) 1.5 l = <input type="text"/> ml |

Symmetry

Draw the symmetry line to the following figures

- | | | |
|--|--|--|
| 1)  | 2)  | 3)  |
| 4)  | 5)  | 6)  |
| 7)  | 8)  | 9)  |

Complete the following figures. (you can use mirror)

- | | |
|---|---|
| 10)  | 11)  |
| 12)  | 13)  |

Sequence 1

Ex 2 4 6 8 10 12 14

16	18
----	----

1) 4 6 8 10 12

--	--

2) 3 6 12 24

--	--

3) 2 6 18

--	--

4) 6 11 16 21 26 31 36

--	--

5) 41 36 31 26 21

--	--

6) 2 5 8 11 14

--	--

7) 1 6 36

--	--

8) 3 8 13 18 23 28

--	--

9) 90 80 70

--	--

10) 9 18 36

--	--

11) 13 12 11 10 9

--	--

12) 0 2 2 4 6 10 16

--	--

13) 1 5 9 13

--	--

Sequence 2

Ex 2 4 6 8 10 12 14

16	18
----	----

1) 7 9 11 13 15

--	--

2) 4 12 36 108

--	--

3) 2 4 8

--	--

4) 5 13 21 29 37 45 53

--	--

5) 55 46 37 28 19

--	--

6) 0 5 10 15 20

--	--

7) 1 8 64

--	--

8) 4 9 16 25

--	--

9) 100 80 60

--	--

10) 7 14 28

--	--

11) 0 1 1 2 3

--	--

12) 0 3 3 6 9 15 24

--	--

13) 1 8 27 64

--	--

OUR PUBLICATIONS (LEC)

NO	Year Group	NAME	STATUS	AUTHOR
1	2	English Classwork Book	Published	R. Myra
2	2	English Homework Book	Published	R. Myra
3	3	Mathematics Classwork Book	Published	M. Nat
4	3	Mathematics Homework Book	Published	M. Nat
5	3	English Book 1	Published	J. Suki
6	3	English Book 2	Published	J. Suki
7	4	Mathematics Classwork Book	Published	M. Nat
8	4	Mathematics Homework Book	Published	M. Nat
9	4	Verbal Reasoning Book 1	Published	M. Nat
10	4	Non-Verbal Reasoning	Published	M. Nat
11	5	Mathematics Book 1	Published	M. Nat
12	5	Mathematics Book 2	Published	M. Nat
13	5	Mathematics Book 3	Published	M. Nat
14	5	Mathematics Book 4	Published	M. Nat
15	5	Mathematics Book 5	Published	M. Nat
16	5	Verbal Reasoning Book 1	Published	M. Nat
17	5	Verbal Reasoning Book 2	Published	M. Nat
18	5	Verbal Reasoning GLS Book	Published	M. Nat
19	5	Comprehension Book 1	Published	R. Myra
20	5	Non Verbal Reasoning Book 1	Published	M. Nat
21	5	Non Verbal Reasoning Book 2	Published	M. Nat
22	6	Mathematics Classwork Book	Published	M. Nat
23	6	Mathematics Arithmetic Book	Published	M. Nat
24	6	Maths Practice Paper Book	Published	M. Nat
25	7	Mathematics Book 1	Published	M. Nat
26	7	Mathematics Book 2	Published	M. Nat
27	8	Mathematics Book 1	Published	M. Nat
28	8	Mathematics Book 2	Published	M. Nat
29	9	Mathematics Book 1	Published	M. Nat
30	9	Mathematics Book 2	Published	M. Nat
31	10	Mathematics Practice Book	Published	M. Nat
32	11	Mathematics Book 1	Published	M. Nat
33	11	Mathematics Book 2	Published	M. Nat

LUXMI EDUCATION CENTRE

Unlock your potential

Courses

- Year 2 * Year 3 * Year 4 * Year 5 * year 6
- Year 7 * Year 8 * Year 9 * Year 10 & 11
- Year 12 & 13

Subjects

Maths, English, Science, Physics, Chemistry, Biology , Statistics, Mechanics

11+

Verbal Reasoning (CEM Style), Non Verbal reasoning (CEM style),
Mathematical Reasoning and English

Contact:

0208 573 0368, 07852810285

Email: luxmieducation@gmail.com

Web: www.leonline.co.uk

101A Blyth Road, Hayes, Middlesex, UB3 1DB

